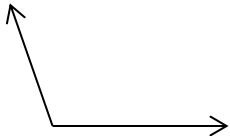
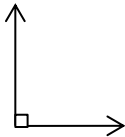
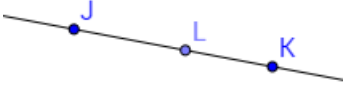
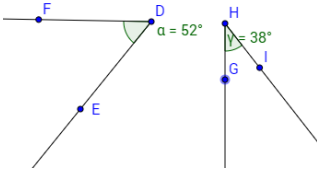
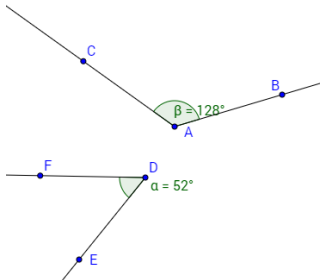
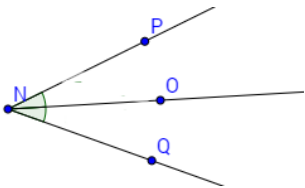
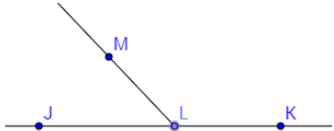
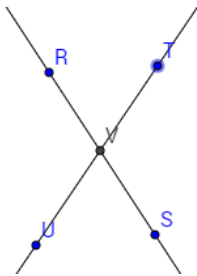
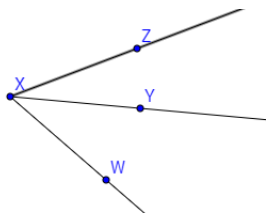
	<p>An acute angle measures _____.</p>	<p>An obtuse angle measures _____.</p>	
	<p>A right angle measures _____.</p>	<p>A straight angle measures _____.</p>	
	<p>Complimentary angles _____.</p>	<p>Supplementary angles _____.</p>	
	<p>Congruent angles _____.</p>	<p>Two adjacent angles are a linear pair when _____.</p>	
	<p>Vertical angles _____.</p>	<p>Adjacent angles _____.</p>	

✂			
✂	Obtuse		Acute
	Straight		Right
	Supplementary		Complementary
	Linear Pair		Congruent
	Adjacent		Vertical
	✂		